


NAME: _____

DIRECTIONS: Count the bees on the flower. Some fly over. How many bees in all? Mark the answer by circling or coloring.

$5 + 4 = \square$

7




9

4

$1 + 7 = \square$

9



8

7

$10 + 0 = \square$

8



9

10

$4 + 3 = \square$

6




7

8

$5 + 1 = \square$

4




5

6

$7 + 1 = \square$

7




8

9

$2 + 5 = \square$

6



7

8

$7 + 3 = \square$

8



9

10

KINDER-1ST RESOURCES {CLICK TO BUY}



FEED THE ALPHABET ABC

Feed the School Friend: Letter Practice Kindergarten ...

\$3.00



STARTS WITH ALPHABET ABC

Starts With Letter Recognition Alphabet Practice Kindergarten ...

\$3.00



COLOR FIND

Find the Color: Color Words Kindergarten Reading Google ...

\$3.00



COLORS READING

Reading Color Words Kindergarten Reading Google SI ...

\$3.00



MAKE NEW NUMBERS

Apples Numbers with Ten Frames: Counting to 10 Kindergarten ...

\$3.00



MAKE NEW NUMBERS

Apples Teen Numbers with Ten Frames: Counting to 20 ...

\$3.00



BEGINS WITH Letters

Apples: Begins With Alphabet Kindergarten Reading Google ...

\$3.00



MAKE TEN COUNTING

How Many to Make 10 with Apples Kindergarten Math Google ...

\$3.00



COUNTING ON: TEENS

Apple Counting On Teens with Ten Frames: 11-20 Kindergarten ...

\$3.00



TALLY MARKS UP to TEN

Halloween Tally Marks: Counting 1-10 Kindergarten Math ...

\$3.00



TALLY MARKS UP to TEN

Farm Tally Marks: Counting 1-10 Kindergarten Math

\$3.00



DECOMPOSE UP to TEN

Farm Theme Number Bonds 3-10: Decomposing Numbers Math ...

\$3.00

