



NAME:


DIRECTIONS: Count all the bees. Count the bees flying away. How many bees are left on the flower? Write the answer in the box.




5
 -4
[]




8
 -3
[]




4
 -4
[]




10
 -6
[]




8
 -5
[]



10
 -1
[]




10
 -5
[]




4
 -2
[]

NAME:

DIRECTIONS: Count all the bees. Count the bees flying away. How many bees are left on the flower? Write the answer in the box.



$$\begin{array}{r} 9 \\ - 4 \\ \hline \end{array}$$



$$\begin{array}{r} 8 \\ - 7 \\ \hline \end{array}$$




$$\begin{array}{r} 10 \\ - 0 \\ \hline \end{array}$$



$$\begin{array}{r} 7 \\ - 3 \\ \hline \end{array}$$




$$\begin{array}{r} 6 \\ - 1 \\ \hline \end{array}$$



$$\begin{array}{r} 8 \\ - 1 \\ \hline \end{array}$$




$$\begin{array}{r} 8 \\ - 5 \\ \hline \end{array}$$



$$\begin{array}{r} 10 \\ - 3 \\ \hline \end{array}$$

NAME:


DIRECTIONS: Count all the bees. Count the bees flying away. How many bees are left on the flower? Write the answer in the box.




$$\begin{array}{r} 6 \\ - 3 \\ \hline \end{array}$$



$$\begin{array}{r} 3 \\ - 3 \\ \hline \end{array}$$




$$\begin{array}{r} 9 \\ - 1 \\ \hline \end{array}$$




$$\begin{array}{r} 8 \\ - 6 \\ \hline \end{array}$$




$$\begin{array}{r} 7 \\ - 4 \\ \hline \end{array}$$



$$\begin{array}{r} 5 \\ - 5 \\ \hline \end{array}$$



$$\begin{array}{r} 8 \\ - 4 \\ \hline \end{array}$$



$$\begin{array}{r} 10 \\ - 0 \\ \hline \end{array}$$

NAME:


DIRECTIONS: Count all the bees. Count the bees flying away. How many bees are left on the flower? Write the answer in the box.




$$\begin{array}{r} 8 \\ - 0 \\ \hline \end{array}$$



$$\begin{array}{r} 2 \\ - 1 \\ \hline \end{array}$$




$$\begin{array}{r} 9 \\ - 3 \\ \hline \end{array}$$




$$\begin{array}{r} 9 \\ - 2 \\ \hline \end{array}$$




$$\begin{array}{r} 9 \\ - 1 \\ \hline \end{array}$$



$$\begin{array}{r} 7 \\ - 2 \\ \hline \end{array}$$



$$\begin{array}{r} 10 \\ - 2 \\ \hline \end{array}$$



$$\begin{array}{r} 10 \\ - 1 \\ \hline \end{array}$$

KINDER-1ST RESOURCES {CLICK TO BUY}



FEED THE ALPHABET ABC

Feed the School Friend: Letter Practice Kindergarten ...

\$3.00



STARTS WITH ALPHABET ABC

Starts With Letter Recognition Alphabet Practice Kindergarten ...

\$3.00



COLOR FIND

Find the Color: Color Words Kindergarten Reading Google ...

\$3.00



COLORS READING

Reading Color Words Kindergarten Reading Google SI ...

\$3.00



MAKE NEW NUMBERS

Apples Numbers with Ten Frames: Counting to 10 Kindergarten ...

\$3.00



MAKE NEW NUMBERS

Apples Teen Numbers with Ten Frames: Counting to 20 ...

\$3.00



BEGINS WITH Letters

Apples: Begins With Alphabet Kindergarten Reading Google ...

\$3.00



MAKE TEN COUNTING

How Many to Make 10 with Apples Kindergarten Math Google ...

\$3.00



COUNTING ON: TEENS

Apple Counting On Teens with Ten Frames: 11-20 Kindergarten ...

\$3.00



TALLY MARKS UP to TEN

Halloween Tally Marks: Counting 1-10 Kindergarten Math ...

\$3.00



TALLY MARKS UP to TEN

Farm Tally Marks: Counting 1-10 Kindergarten Math

\$3.00



DECOMPOSE UP to TEN

Farm Theme Number Bonds 3-10: Decomposing Numbers Math ...

\$3.00

