

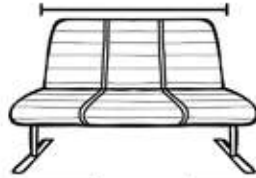
# March



Name: \_\_\_\_\_

## Estimating Meters

Color in the best estimate for the real item.



the width of a bench seat

about 2 meters

about 20 meters

about 200 meters

## Complete the Sentence: Long I

Fill in the blank with the missing long i word.

- The boy was so    that he hid behind his mom and never appeared.
- I    with my little eye...

## Kinds of Sentences

Choose the correct punctuation for each sentence.

- St. Patrick's Day is celebrated on March 17th every year
- Why do people wear green on St. Patrick's Day

.	!	?
.	!	?

	71
	96
	38
	12
	77

## Mystery Addition



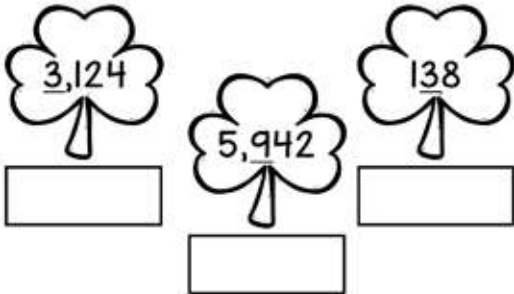
## Shape Riddles

I have three straight sides and three corners. What shape am I?

- triangle
- square
- pyramid
- cube
- pentagon

## Place Value

Write the value of the underlined numbers.



## ABC Order

Number the words 1-4 in alphabetical order.


- \_\_\_ sunshine
- \_\_\_ St. Patrick
- \_\_\_ splash
- \_\_\_ seed

## Addition

$$\begin{array}{r} 142 \\ +310 \\ \hline \end{array} \quad \begin{array}{r} 768 \\ +495 \\ \hline \end{array}$$

## Cause and Effect

What is the cause?



\_\_\_\_\_

\_\_\_\_\_

\_\_\_\_\_

\_\_\_\_\_

## Quotation Marks

Add quotation marks where they belong in the sentence.



Can I buy this book?  
the boy asked.